



Cambridge IGCSE™

CANDIDATE
NAME


--

CENTRE
NUMBER

--	--	--	--	--

CANDIDATE
NUMBER

--	--	--	--



CAMBRIDGE INTERNATIONAL MATHEMATICS

0607/22

Paper 2 (Extended)

May/June 2022

45 minutes

You must answer on the question paper.

You will need: Geometrical instruments

INSTRUCTIONS

- Answer **all** questions.
- Use a black or dark blue pen. You may use an HB pencil for any diagrams or graphs.
- Write your name, centre number and candidate number in the boxes at the top of the page.
- Write your answer to each question in the space provided.
- Do **not** use an erasable pen or correction fluid.
- Do **not** write on any bar codes.
- Calculators must **not** be used in this paper.
- You may use tracing paper.
- You must show all necessary working clearly and you will be given marks for correct methods even if your answer is incorrect.
- All answers should be given in their simplest form.

INFORMATION

- The total mark for this paper is 40.
- The number of marks for each question or part question is shown in brackets [].

This document has **8** pages.

Formula List

For the equation $ax^2 + bx + c = 0$ $x = \frac{-b \pm \sqrt{b^2 - 4ac}}{2a}$

Curved surface area, A , of cylinder of radius r , height h . $A = 2\pi rh$

Curved surface area, A , of cone of radius r , sloping edge l . $A = \pi rl$

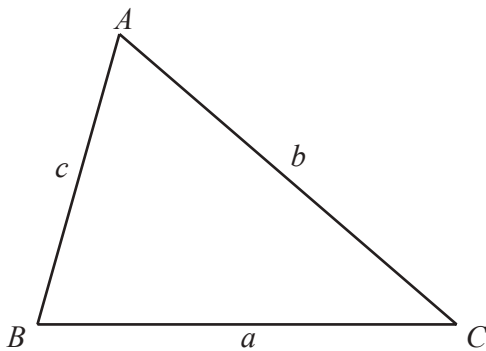
Curved surface area, A , of sphere of radius r . $A = 4\pi r^2$

Volume, V , of pyramid, base area A , height h . $V = \frac{1}{3}Ah$

Volume, V , of cylinder of radius r , height h . $V = \pi r^2 h$

Volume, V , of cone of radius r , height h . $V = \frac{1}{3}\pi r^2 h$

Volume, V , of sphere of radius r . $V = \frac{4}{3}\pi r^3$



$$\frac{a}{\sin A} = \frac{b}{\sin B} = \frac{c}{\sin C}$$

$$a^2 = b^2 + c^2 - 2bc \cos A$$

$$\text{Area} = \frac{1}{2}bc \sin A$$

Answer **all** the questions.

1 Work out.

$$(0.03)^2$$

..... [1]

2 (a) Write the fraction $\frac{15}{40}$ in its lowest terms.

..... [1]

(b) Work out.

$$\frac{2}{3} + \frac{2}{9}$$

..... [2]

3 Solve the equation.

$$x - 11 = -4$$

$x =$ [1]

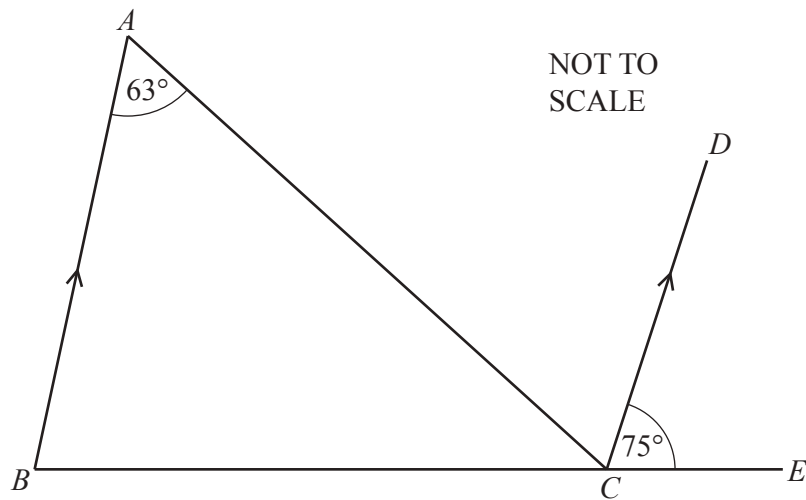
4 Change 600 cm^3 into m^3 .

..... m^3 [1]

5 Work out $64^{\frac{1}{3}}$.

..... [1]

6



AB is parallel to CD .

Find angle ACD .

Angle $ACD = \dots\dots\dots$ [1]

- 7 Kendra jogs 7 km in 45 minutes.
She then runs at 12 km/h for 30 minutes.

Find her average speed in km/h for the whole journey.

$\dots\dots\dots$ km/h [3]

- 8 The mean of eight numbers is 25.
When two extra numbers are included the mean of the ten numbers is 24.

Find the mean of the two extra numbers.

$\dots\dots\dots$ [2]

9 Solve the simultaneous equations.

$$5x + 2y = -12$$

$$3x - y = -5$$

$$x = \dots\dots\dots$$

$$y = \dots\dots\dots [3]$$

10 A is the point $(-1, 13)$ and B is the point $(3, 1)$.

Find the equation of the line AB , giving your answer in the form $y = mx + c$.

$$y = \dots\dots\dots [3]$$

11 Solve.

$$6x^2 - 5x - 6 = 0$$

$$x = \dots\dots\dots \text{ or } x = \dots\dots\dots [3]$$

- 12 The lengths of the sides of a triangle are 3 cm, 4 cm and 5 cm.

Find the sine of the smallest angle.

..... [1]

- 13 John goes to a shop that sells newspapers and magazines only.

(a) Complete the table of probabilities of John buying something at the shop.

	Buys a newspaper	Does not buy a newspaper	Total
Buys a magazine			0.40
Does not buy a magazine	0.25		
Total	0.55		1.00

[2]

(b) Find the probability that John buys a magazine but not a newspaper.

..... [1]

14 $f(x) = |2x + 3|$

Find the values of x when $f(x) = 15$.

..... [2]

- 15** A bag has 5 black counters, 4 white counters and 1 red counter. One counter is chosen at random and is replaced. A second counter is then chosen at random.

Find the probability that the two counters chosen are different colours.

..... [4]

- 16** Solve.

$$\log x = 1 + \log 9 - \log 8 + 2 \log \frac{2}{3}$$

$x =$ [3]

Question 17 is printed on the next page.

17 (a) Expand the brackets and simplify.

$$(\sqrt{a} + \sqrt{b})(\sqrt{a} - \sqrt{b})$$

..... [2]

(b) Rationalise the denominator.

$$\frac{1}{\sqrt{7} + \sqrt{6}}$$

..... [1]

(c) Work out the value of

$$\frac{1}{\sqrt{9} + \sqrt{8}} + \frac{1}{\sqrt{8} + \sqrt{7}} + \frac{1}{\sqrt{7} + \sqrt{6}} + \frac{1}{\sqrt{6} + \sqrt{5}} + \frac{1}{\sqrt{5} + \sqrt{4}}$$

..... [2]

Permission to reproduce items where third-party owned material protected by copyright is included has been sought and cleared where possible. Every reasonable effort has been made by the publisher (UCLES) to trace copyright holders, but if any items requiring clearance have unwittingly been included, the publisher will be pleased to make amends at the earliest possible opportunity.

To avoid the issue of disclosure of answer-related information to candidates, all copyright acknowledgements are reproduced online in the Cambridge Assessment International Education Copyright Acknowledgements Booklet. This is produced for each series of examinations and is freely available to download at www.cambridgeinternational.org after the live examination series.

Cambridge Assessment International Education is part of Cambridge Assessment. Cambridge Assessment is the brand name of the University of Cambridge Local Examinations Syndicate (UCLES), which is a department of the University of Cambridge.