

CANDIDATE
NAME

--

CENTRE
NUMBER

--	--	--	--	--

CANDIDATE
NUMBER

--	--	--	--



CAMBRIDGE INTERNATIONAL MATHEMATICS

0607/22

Paper 2 (Extended)

May/June 2016

45 minutes

Candidates answer on the Question Paper.

Additional Materials: Geometrical Instruments

READ THESE INSTRUCTIONS FIRST

Write your Centre number, candidate number and name on all the work you hand in.

Write in dark blue or black pen.

Do not use staples, paper clips, glue or correction fluid.

You may use an HB pencil for any diagrams or graphs.

DO NOT WRITE IN ANY BARCODES.

Answer **all** the questions.

CALCULATORS MUST NOT BE USED IN THIS PAPER.

All answers should be given in their simplest form.

You must show all the relevant working to gain full marks and you will be given marks for correct methods even if your answer is incorrect.

The number of marks is given in brackets [] at the end of each question or part question.

The total number of marks for this paper is 40.

This document consists of **8** printed pages.

Formula List

For the equation $ax^2 + bx + c = 0$ $x = \frac{-b \pm \sqrt{b^2 - 4ac}}{2a}$

Curved surface area, A , of cylinder of radius r , height h . $A = 2\pi rh$

Curved surface area, A , of cone of radius r , sloping edge l . $A = \pi rl$

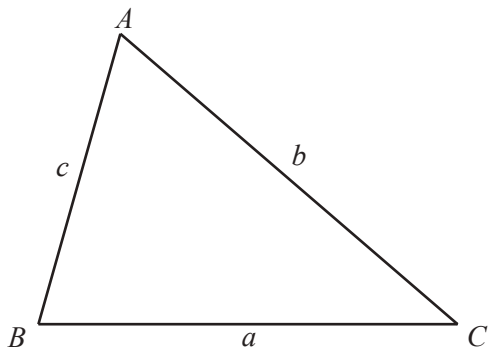
Curved surface area, A , of sphere of radius r . $A = 4\pi r^2$

Volume, V , of pyramid, base area A , height h . $V = \frac{1}{3}Ah$

Volume, V , of cylinder of radius r , height h . $V = \pi r^2 h$

Volume, V , of cone of radius r , height h . $V = \frac{1}{3}\pi r^2 h$

Volume, V , of sphere of radius r . $V = \frac{4}{3}\pi r^3$



$$\frac{a}{\sin A} = \frac{b}{\sin B} = \frac{c}{\sin C}$$

$$a^2 = b^2 + c^2 - 2bc \cos A$$

$$\text{Area} = \frac{1}{2}bc \sin A$$

Answer **all** the questions.

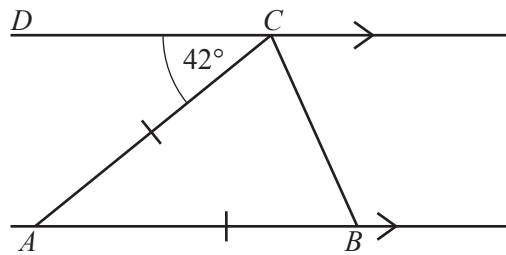
1 Work out $1\frac{1}{2} + 3\frac{1}{3}$.

..... [2]

2 Increase 1 h 30 min by 10%.

..... h min [2]

3



NOT TO
SCALE

In the diagram, DC is parallel to AB and $AC = AB$.

Work out angle ACB .

Angle $ACB =$ [2]

4 $t = \frac{1}{p^2}$

Rearrange the formula to write p in terms of t .

$p = \dots\dots\dots$ [2]

- 5 A biased die, that has six faces, is numbered 1 to 6.
The table shows the results when the die is rolled 60 times.

Number	1	2	3	4	5	6
Frequency	3	12	8	16	7	14

- (a) Jose rolls the die.

Find the probability that the number shown is even.

$\dots\dots\dots$ [1]

- (b) Jose rolls the die 1200 times.

Find the expected number of times that the number shown on the die is even.

$\dots\dots\dots$ [1]

- 6 Solve the simultaneous equations.

$$\begin{aligned} 3x - 2y &= 7 \\ 5x + 2y &= 1 \end{aligned}$$

$x = \dots\dots\dots$

$y = \dots\dots\dots$ [2]

7 Work out $\frac{8 \times 10^7}{5 \times 10^{-12}}$.

Give your answer in standard form.

..... [2]

8 Solve the inequality.

$$9 - x > 6x + 2$$

..... [2]

9 (a) $x^3 \div x^p = x^5$

Find the value of p .

$p =$ [1]

(b) Work out.

(i) $(\sqrt{2})^6$

..... [1]

(ii) $\frac{1}{8^{-\frac{1}{3}}}$

..... [2]

- 10 The line $2x + 3y = 36$ intersects the x -axis at P and the y -axis at Q .
 M is the midpoint of PQ .

Find the column vector \overrightarrow{OM} where O is the origin.

$$\begin{pmatrix} \\ \end{pmatrix} \quad [4]$$

- 11 Factorise completely.

$$2p - q + 2xp - xq$$

..... [2]

- 12 Rationalise the denominator.

$$\frac{5}{\sqrt{2} + 1}$$

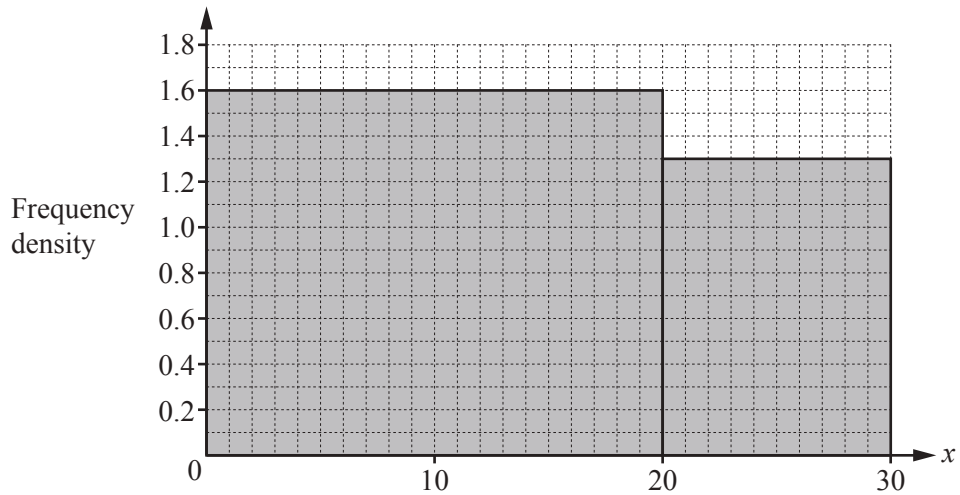
..... [2]

13 The area of a semicircle is $32\pi \text{ cm}^2$.

Work out the perimeter of the semicircle.
Give your answer in terms of π .

..... cm [3]

14



Complete the frequency table using the information in the histogram.

Class interval	Frequency
$0 < x \leq 20$	
$20 < x \leq 30$	

[2]

Questions 15, 16 and 17 are printed on the next page

15 $y \propto \frac{1}{\sqrt{x}}$

When $x = 4$, $y = 3$.

Find y in terms of x .

$y = \dots\dots\dots$ [2]

16 $\log y = 2 \log 3 + 3 \log 2 - \log 6$

Find the value of y .

$y = \dots\dots\dots$ [3]

17 Describe fully the **single** transformation that maps the graph of $y = \cos x$ onto the graph of $y = 3\cos x$.

.....
 [2]

Permission to reproduce items where third-party owned material protected by copyright is included has been sought and cleared where possible. Every reasonable effort has been made by the publisher (UCLES) to trace copyright holders, but if any items requiring clearance have unwittingly been included, the publisher will be pleased to make amends at the earliest possible opportunity.

To avoid the issue of disclosure of answer-related information to candidates, all copyright acknowledgements are reproduced online in the Cambridge International Examinations Copyright Acknowledgements Booklet. This is produced for each series of examinations and is freely available to download at www.cie.org.uk after the live examination series.

Cambridge International Examinations is part of the Cambridge Assessment Group. Cambridge Assessment is the brand name of University of Cambridge Local Examinations Syndicate (UCLES), which is itself a department of the University of Cambridge.